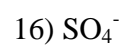
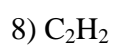
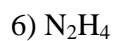
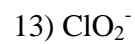
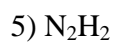
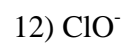
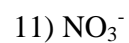
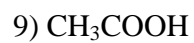


For the following neutral molecules, calculate the total number of valence electrons and draw the correct Lewis structure. Indicate the hybridization of each non-H atom in the structure.



Draw all resonance structures for the following compounds.

